

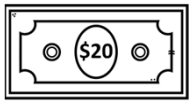


Bill and Coin Totals



- 1 If you have 2 quarters, 1 twenty-dollar bill, and 3 nickels, how much money do you have in total?
- 2 What is the value of 4 dimes, 3 one-dollar bills, and 2 pennies combined?
- 3 If you have 5 fifty-cent coins, 2 five-dollar bills, and 1 dime, how much money do you possess altogether?
- 4 How much money would you have if you had 7 quarters, 4 ten-dollar bills, and 2 nickels?
- 5 If you have 3 one-dollar bills, 2 quarters, and 5 pennies, what is the total value of your money?
- 6 How much money is represented by 6 half-dollar coins, 2 twenty-dollar bills, and 4 pennies combined?
- 7 If you have 8 dimes, 3 five-dollar bills, and 1 quarter, what is the total worth of your money?
- 8 What is the value of 5 nickels, 1 fifty-dollar bill, and 2 pennies added together?